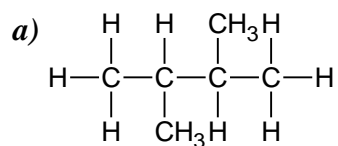


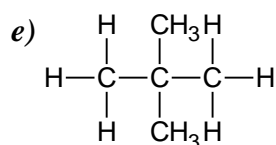
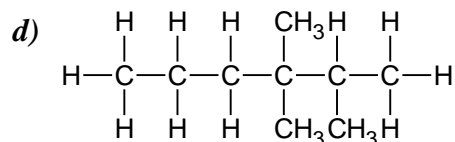
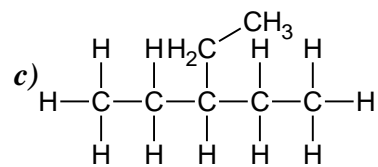
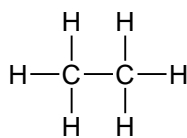
# More naming exercises

---

1. Name the following molecules



b)



2. Draw the following molecules

a) heptane

b) 2 methyl pentane

c) 2,3 dimethyl butane

d) 2,3,4 trimethyl pentane

e) 4 propyl heptane

f) 2 methyl 3 ethyl pentane

g) 2,2,3,3 tetra methyl butane

h) 2,2 dimethyl 3,3 diethyl pentane